

Pumpkin Math

Name: _____ My pumpkin is labeled letter _____ .

Estimation

I estimate my pumpkin **weighs** _____ pounds.

I estimate the **perimeter** of my pumpkin is _____ **inches** around.

I estimate the **perimeter** of my pumpkin is _____ **centimeters** around.

I estimate the **number of seeds** my pumpkin has inside is _____.

Actual





The actual **weight** of my pumpkin is _____ pounds.

The actual **perimeter** of my pumpkin is _____ inches around.

The actual **perimeter** of my pumpkin is _____ centimeters around.


The actual number of pumpkin **seeds** in my section is _____.

The actual **total number** of pumpkin **seeds** is _____.

				Total Number of Seeds
_____	_____	_____	_____	_____
seeds	seeds	seeds	seeds	seeds

My pumpkin has _____ grooves around the outside.

My pumpkin's letter is _____ . Here is a **detailed** diagram of my pumpkin.



If I were to decorate my pumpkin for Halloween, I'd make it look like this...

